


Warm Up!

- 1.) Write in agenda book
- 2.) A journalist types 180 words in 3 minutes. How many words can the journalist type per minute?



Review Game
Chapter 6 Quiz



Nov 6-8:15 AM

Nov 6-8:16 AM




At McDonald's, a family buys 3 cheeseburgers, 5 french fries, 2 orders of chicken nuggets and 5 drinks. Write the ratio of french fries to total items bought 3 ways and in simplest form.



The ratio of boys to girls is 8 : 9. Explain this ratio using words.

Nov 6-8:38 AM

Nov 6-8:39 AM




Kate reads 12 chapters in 4 days. At this rate, how many chapters does she read in 18 days?

Chapters	12		
Days	4		


Nov 6-8:39 AM

Below is a table of equivalent ratios of basketballs to footballs. Complete the table.

Basketballs	5	15	30	40
Footballs	9	27	54	72




Nov 6-8:55 AM



The book fair had a sale where 4 books were \$31.36. If you wanted to buy 3 books, how much money would you need?


Nov 6-8:40 AM

In September a clothing store had a sale where you could get 2 scarves for \$10.70. In October the price was changed to 7 scarves for \$37.52. On which month did a scarf cost the most?



Nov 6-8:41 AM

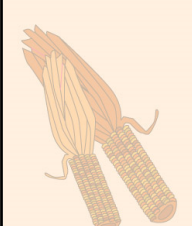
Write 3 equivalent ratios to 8 to 12




Nov 6-8:46 AM

Order the following ~~integers~~ ^{rational numbers} from least to greatest.

-7, -9, 1.5, 1.75, -2, 2



Nov 6-8:46 AM



$2.3 + 879.561$

Nov 6-8:48 AM